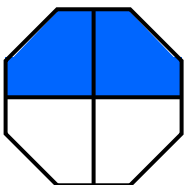


How To Write Two Fourth

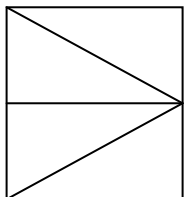
www.fractionsworksheets.ca

In this basic fraction worksheet you will learn about two fourth. In two given shapes find which shape has four equal parts and colour two parts to represent two fourth in each problem. First one is done for you as an example:


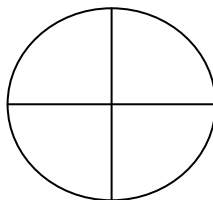
1.



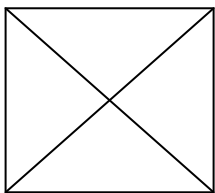

$$\frac{2}{4}$$



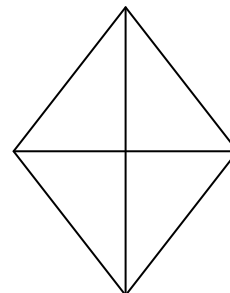
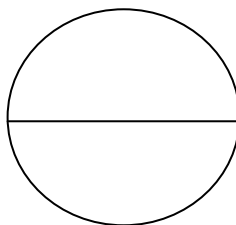
2.



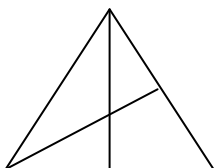
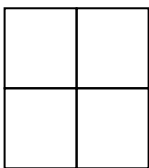
3.



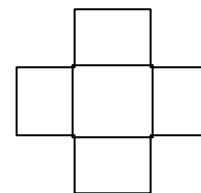

4.




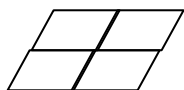
5.



6.



7.



8.

