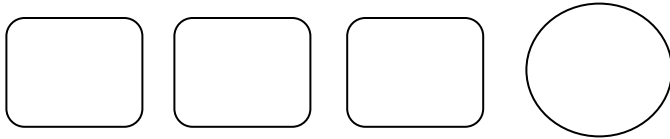


Fraction Worksheets – Part of a group

Writing fractions as a part of group of objects – Practice using fraction worksheets

A group of objects is given for all ***fraction worksheets***. Kids need to follow the directions to write a fraction for the part of group having different characteristics. First problem is solved for explanations:

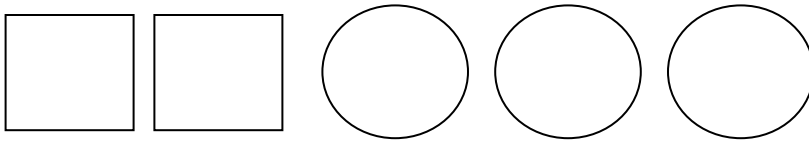
1)




Fraction of circles to total shapes

$$\frac{\text{Number of circles}}{\text{Total number of shapes}} = \frac{1}{4}$$


2)



3)



4)



5)

