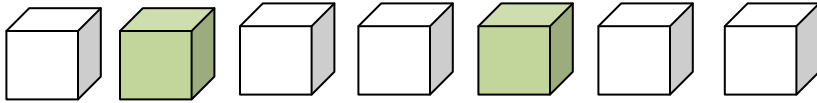


Fraction Worksheets – Part of a group

Writing fractions as a part of group of objects – Practice using fraction worksheets

A group of objects is given for all ***fraction worksheets***. Kids need to follow the directions to write a fraction for the part of group having different characteristics. First problem is solved as an explanation:

1)



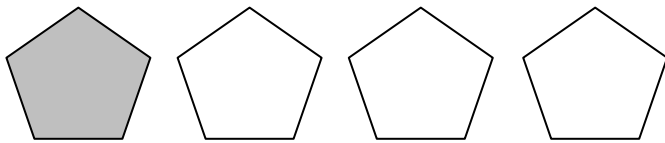
Fraction of uncoloured shapes to all shapes

Number of uncolored shapes


All shapes

$$= \frac{5}{7}$$

2)



3)



4)



5)

